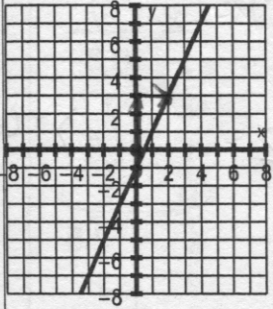


Trouve l'équation

Nom: _____

28. $y = 2x - 1$



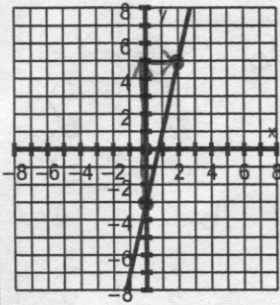
$b = -1$

$m = \frac{4}{2} = 2$

$y = mx + b$

$y = 2x - 1$

29. $y = 4x - 2$



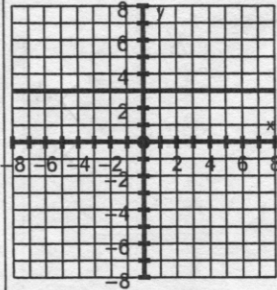
$b = -2$

$m = \frac{8}{2} = 4$

$y = mx + b$

$y = 4x - 2$

30. $y = 3$



$m = 0$

$b = 3$

$y = 3$